

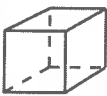

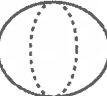






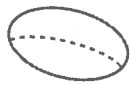


**solides
géométriques**

2 Classe les solides aux bons endroits en inscrivant les numéros apparaissant dans chaque carré près des solides.

<div style="border: 1px solid black; border-radius: 15px; padding: 10px; width: 80%; margin: auto;"> <div style="display: flex; justify-content: space-around; font-weight: bold;"> 3 4 </div> <div style="display: flex; justify-content: space-around; font-weight: bold; margin-top: 20px;"> 1 2 5 </div> <div style="display: flex; justify-content: space-around; font-weight: bold; margin-top: 20px;"> 6 7 8 </div> </div>	<div style="border: 1px solid black; border-radius: 15px; padding: 10px; width: 80%; margin: auto;"> <div style="display: flex; justify-content: space-around; font-weight: bold;"> 9 10 </div> </div>
---	--

polyèdres






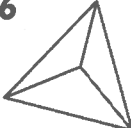

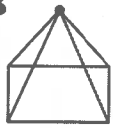


1 	2 
3 	4 
5 	6 
7 	8 
9 	10 

3 Classe les prismes et les pyramides aux bons endroits en y inscrivant les chiffres apparaissant près des solides.

<div style="border: 1px solid black; border-radius: 15px; padding: 10px; width: 80%; margin: auto;"> <div style="display: flex; justify-content: space-around; font-weight: bold;"> 1 2 </div> <div style="display: flex; justify-content: space-around; font-weight: bold; margin-top: 20px;"> 4 7 </div> <div style="display: flex; justify-content: space-around; font-weight: bold; margin-top: 20px;"> 9 10 </div> </div>	<div style="border: 1px solid black; border-radius: 15px; padding: 10px; width: 80%; margin: auto;"> <div style="display: flex; justify-content: space-around; font-weight: bold;"> 3 6 </div> <div style="display: flex; justify-content: space-around; font-weight: bold; margin-top: 20px;"> 5 8 </div> </div>
--	---

prismes

pyramides

1 	2 
3 	4 
5 	6 
7 	8 
9 	10 



1 point par bonne réponse