

Feuilles 3a et 3b: RÉPONSES

Answer key



1) Divide into groups of 5:



a) How many groups of 5 can you form?

$17 \div 5 = 3$ reste: 2

b) How many items left over?

3) Divide into groups of 7:

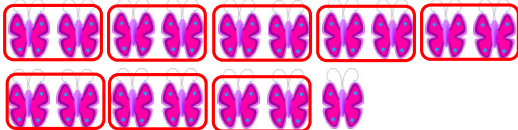


a) How many groups of 7 can you form?

$27 \div 7 = 3$ reste: 6

b) How many items left over?

5) Divide into groups of 2:




a) How many groups of 2 can you form?

$17 \div 2 = 8$ reste: 1

b) How many items left over?

7) Divide into groups of 9:

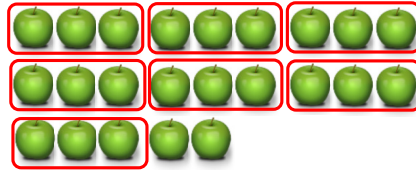


a) How many groups of 9 can you form?

$26 \div 9 = 2$ reste: 8

b) How many items left over?

2) Divide into groups of 3:




a) How many groups of 3 can you form?

$23 \div 3 = 7$ reste: 2

b) How many items left over?

4) Divide into groups of 4:




a) How many groups of 4 can you form?

$33 \div 4 = 8$ reste: 1

b) How many items left over?

6) Divide into groups of 6:




a) How many groups of 6 can you form?

$20 \div 6 = 3$ reste: 2

b) How many items left over?

8) Divide into groups of 8:



a) How many groups of 8 can you form?

$20 \div 8 = 2$ reste: 4

b) How many items left over?