

Combien d'argent y a-t-il?

1. Compte l'argent.



2. Écris la réponse dans ton cahier de math.

6,10

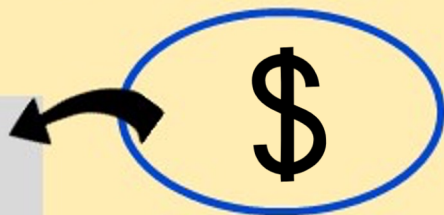
3. Place le symbole \$ à la fin.



1. Combien d'argent y a-t-il?



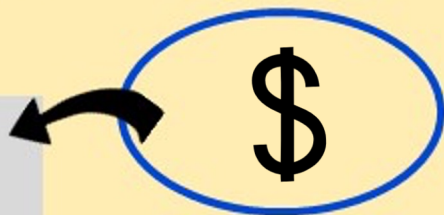
Il y a



2. Combien d'argent y a-t-il?



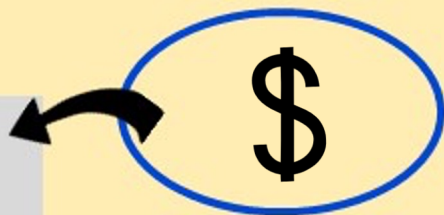
Il y a



3. Combien d'argent y a-t-il?



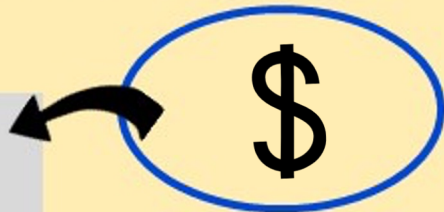
Il y a




4. Combien d'argent y a-t-il?



Il y a



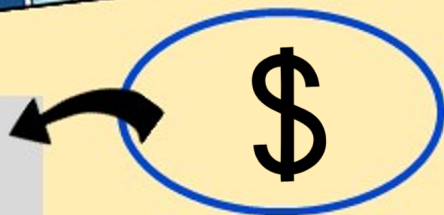
5. Combien d'argent y a-t-il?



Il y a



.



6. Combien d'argent y a-t-il?




Il y a



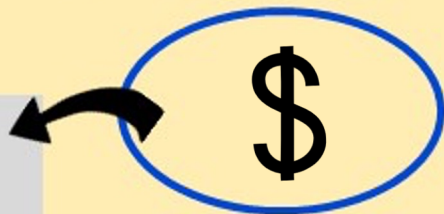
.

\$

7. Combien d'argent y a-t-il?



Il y a



8. Combien d'argent y a-t-il?



Il y a



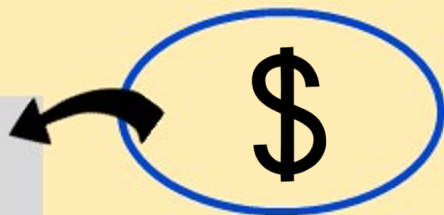
.

\$

9. Combien d'argent y a-t-il?



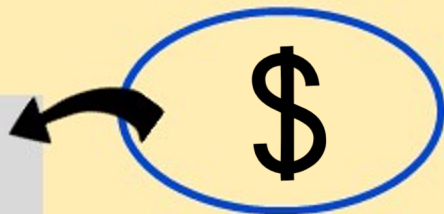
Il y a



10. Combien d'argent y a-t-il?



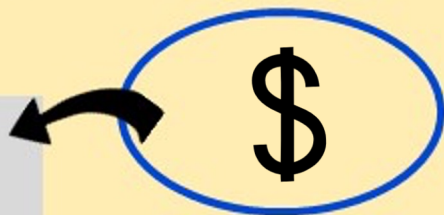
Il y a



11. Combien d'argent y a-t-il?



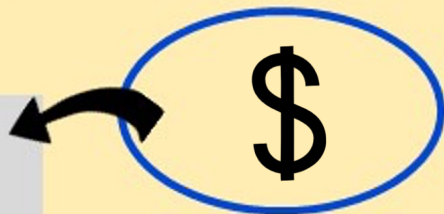
Il y a



12. Combien d'argent y a-t-il?



Il y a



13. Combien d'argent y a-t-il?



Il y a



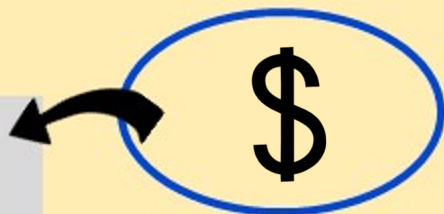
.

\$

14. Combien d'argent y a-t-il?



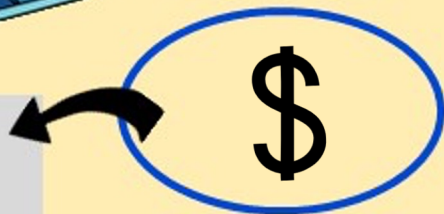
Il y a



15. Combien d'argent y a-t-il?



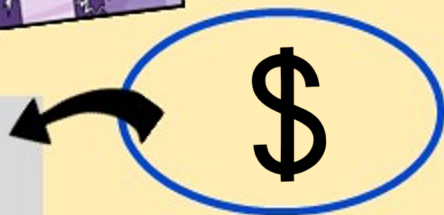
Il y a



16. Combien d'argent y a-t-il?



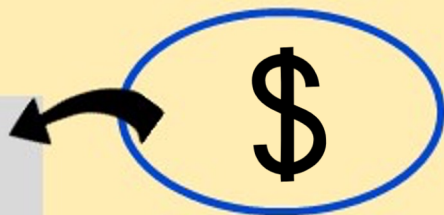
Il y a



17. Combien d'argent y a-t-il?



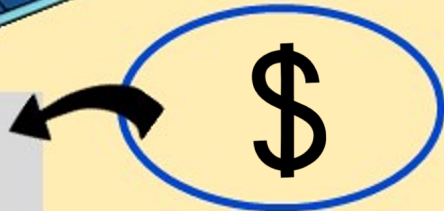
Il y a



18. Combien d'argent y a-t-il?



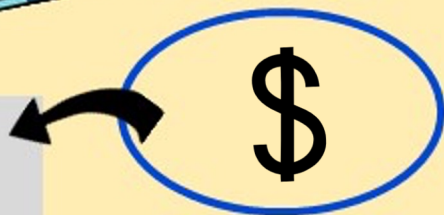
Il y a



20. Combien d'argent y a-t-il?



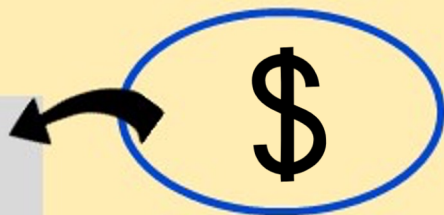
Il y a



21. Combien d'argent y a-t-il?



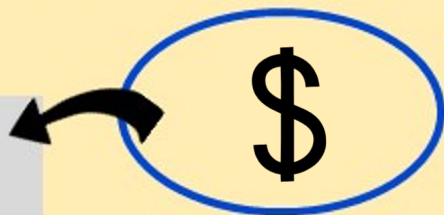
Il y a



22. Combien d'argent y a-t-il?



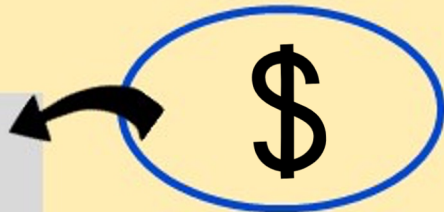
Il y a




23. Combien d'argent y a-t-il?



Il y a





BRAVO!
Tu as fini!